



Timed Events Problems **Answers**

Question	Answer
1. How many hours pass between the following times?	
a.	2 hours
b.	3 hours
c.	3 hours
d.	7 hours
e.	9 hours
f.	4 hours
2. Answer these questions. Use the timelines to help.	
a.	3:45 p.m.
b.	1:15 p.m.
c.	2:15 p.m.
d.	7:30 p.m.

3. Answer these word problems by ticking all the circles that show the correct answer.

a.	<div> <input checked="" type="checkbox"/> 4:45 p.m. <input checked="" type="checkbox"/> $\frac{1}{4}$ to 5 </div>
----	--

b.	<div> <input checked="" type="checkbox"/> 10:45 a.m. <input checked="" type="checkbox"/> $\frac{1}{4}$ to 11 </div>
----	--

4. Calculate how long each lesson lasts (in minutes) and then order the lessons from shortest to longest.

Maths	9:15 a.m.	10:15 a.m.	60 minutes
Literacy	10:30 a.m.	11:15 a.m.	45 minutes
PE	1:15 p.m.	1:45 p.m.	30 minutes







shortest ← → longest

PE	literacy	maths
-----------	-----------------	--------------



Timed Events Problems **Answers**

Question	Answer
1. How much time passes between the following times?	
a.	1 hour 15 minutes (75 minutes)
b.	15 minutes
c.	2 hours 15 minutes (135 minutes)
d.	2 hours 45 minutes (165 minutes)
e.	6 hours 15 minutes (375 minutes)
f.	2 hours 30 minutes (150 minutes)
2. Answer these questions. Use the timelines to help.	
a.	4:00 p.m.
b.	12:50 p.m.
c.	11:10 a.m.
d.	10:20 a.m.

3. Answer these word problems by ticking all the circles that show the correct answer.			
a.			
b.			
4. Calculate how long each programme lasts (in minutes) and then order the programmes from shortest to longest.			
Cartoon Capers	12:10 p.m.	1:00 p.m.	50 minutes
Get that Dog!	1:00 p.m.	2:10 p.m.	70 minutes
Funny Film Clips	2:20 p.m.	2:50 p.m.	30 minutes
shortest ←————→ longest			
Funny Film Clips	Cartoon Capers	Get that Dog!	



Timed Events Problems **Answers**

Question	Answer
1. How much time passes between the following times?	
a.	1 hour 5 minutes (65 minutes)
b.	1 hour 25 minutes (85 minutes)
c.	2 hours 10 minutes (130 minutes)
d.	3 hours 40 minutes (220 minutes)
e.	3 hours 50 minutes (230 minutes)
f.	4 hours 20 minutes (260 minutes)
2. Answer these questions. Use the timelines to help.	
a.	2:15 p.m.
b.	8:05 p.m.
c.	11:15 p.m.
d.	8:05 p.m.

3. Answer these word problems by ticking all the circles that show the correct answer.			
a.			
b.			
4. Calculate how long each film lasts (in minutes) and then order the films from shortest to longest.			
The True Way Home	12:15 p.m.	2:55 p.m.	160 minutes
Spy Sisters	1:05 p.m.	3:35 p.m.	150 minutes
Don't Lose the Dog	4:35 p.m.	5:55 p.m.	80 minutes
shortest ←————→ longest			
Don't Lose the Dog	Spy Sisters		The True Way Home