



# Timed Events Problems

I can solve problems about the duration of events.



1) How many hours pass between the following times?

a) 2:00 p.m. to 4:00 p.m.

\_\_\_\_\_

b) 3:00 p.m. to 6:00 p.m.

\_\_\_\_\_

c) 10:30 a.m. to 1:30 p.m.

\_\_\_\_\_

d) 3:30 p.m. to 10:30 p.m.

\_\_\_\_\_

e) 2:30 p.m. to 11:30 p.m.

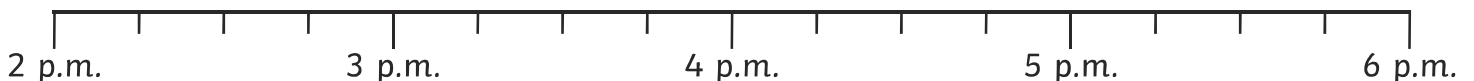
\_\_\_\_\_

f) 9:30 p.m. to 1:30 a.m. (the next day)

\_\_\_\_\_

2) Answer these questions. Use the timelines to help you.

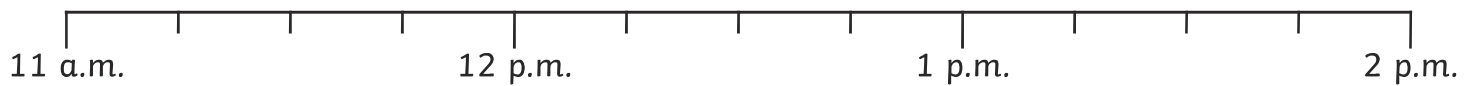
a) I leave school at 3:15 p.m. It takes me 30 minutes to walk home.  
What time do I arrive home?



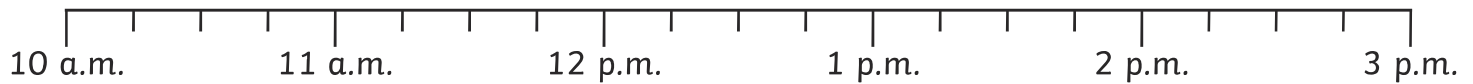
\_\_\_\_\_



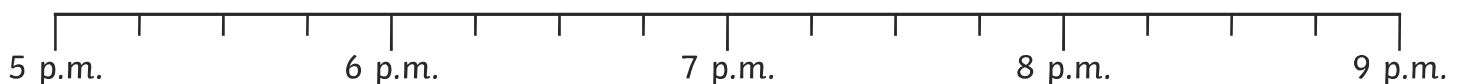
- b) Maths finishes at 12:30 p.m. We then have lunch for 45 minutes.  
What time does lunch end?



- c) I get off the bus at 2:45 p.m. The journey lasted 30 minutes.  
What time did the bus leave?

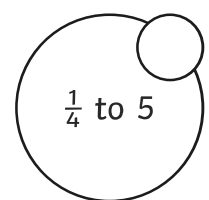
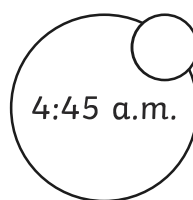
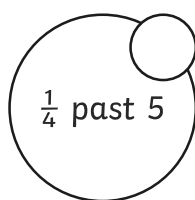
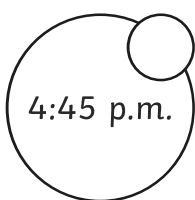


- d) My favourite TV show finishes at 8:15 p.m. It lasts 45 minutes.  
What time did it start?

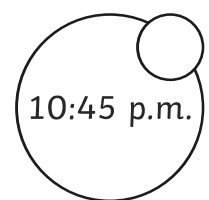
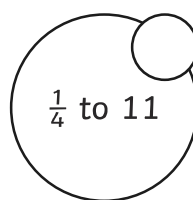
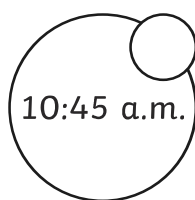
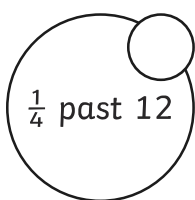


- 3) Answer these word problems by ticking all the circles that show the correct answer.

- a) Poppy walks to her friend's house. She sets off at 4:15 p.m. It takes her 30 minutes to get there. What time does she arrive?



- b) Keenan finishes tidying his bedroom at 11:30 a.m. It took him 45 minutes to tidy it.  
When did he start?

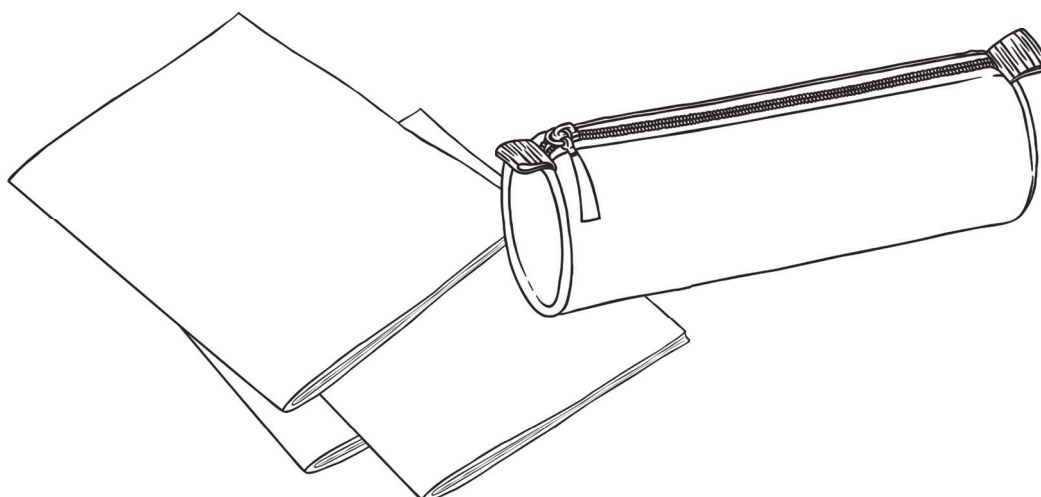




4) Here is a table to show the start and end time of each lesson. Calculate how long each lesson lasts (in minutes) and then order the lessons from shortest to longest.

	Start	End	Length of Lesson
Maths	9:15 a.m.	10:15 a.m.	
English	10:30 a.m.	11:15 a.m.	
PE	1:15 p.m.	1: 45 p.m.	

shortest ← → longest		





# Timed Events Problems

I can solve problems about the duration of events.



1) How much time passes between the following times?

a) 3:00 p.m. to 4:15 p.m.

\_\_\_\_\_

b) 3:15 p.m. to 3:30 p.m.

\_\_\_\_\_

c) 10:30 a.m. to 12:45 p.m.

\_\_\_\_\_

d) 5:30 p.m. to 8:15 p.m.

\_\_\_\_\_

e) 2:15 p.m. to 8:30 p.m.

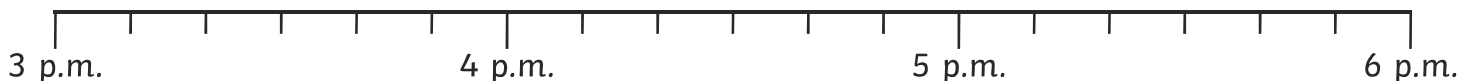
\_\_\_\_\_

f) 11:30 p.m. to 2:00 a.m. (the next day)

\_\_\_\_\_

2) Answer these questions. Use the timelines to help you.

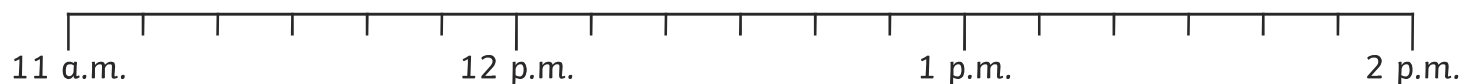
a) I set off to walk to my grandma's house at 3:20 p.m. It takes me 40 minutes to walk there. What time do I arrive?



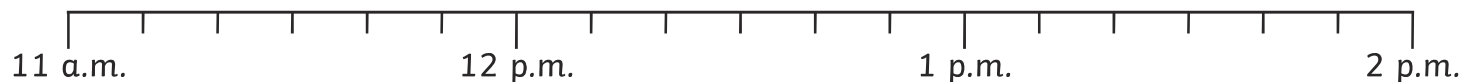
\_\_\_\_\_



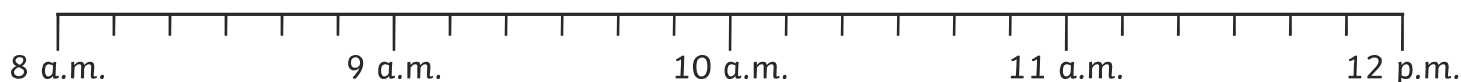
- b) My dance lesson starts at 11:40 a.m. It lasts 1 hour and 10 minutes.  
What time does it end?



- c) I flew from London to Madrid. The flight lasted 2 hours and 30 minutes and the plane landed at 1:40 p.m. What time did it take off?

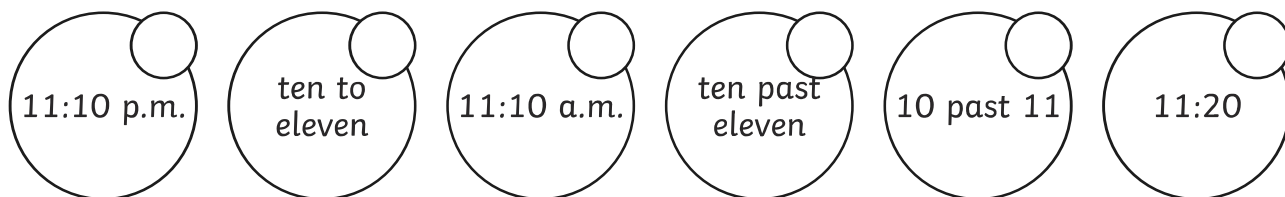


- d) My train arrives at the station at 11:10 a.m. The train journey lasted 50 minutes.  
What time did the train depart?

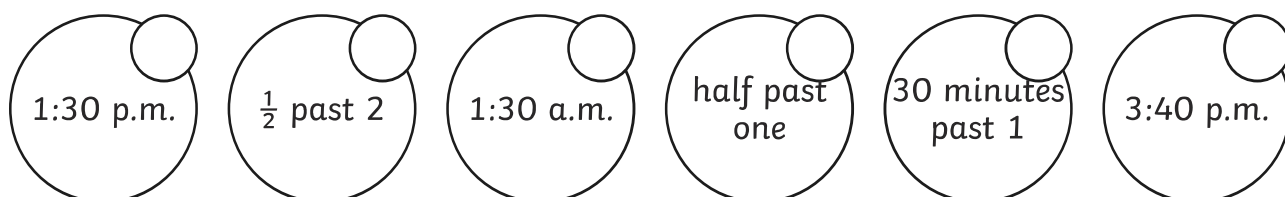


- 3) Answer these word problems by ticking all the circles that show the correct answer.

- a) Tyrol meets his friend at the park at 10:20 a.m. They spend 30 minutes on the playground and play football for 20 minutes. Then, they go home. What time did they leave the park?



- b) Trudi works on her homework project for 1 hour and 10 minutes and stops at 2:40 p.m. What time did she start work?






4) Here is a table to show the start and end time of some TV shows. Calculate how long each programme lasts (in minutes) and then order the programmes from shortest to longest.

	Start	End	Length of Show
Cartoon Capers	12:10 p.m.	1:00 p.m.	
Get that Dog!	1:00 p.m.	2:10 p.m.	
Funny Film Clips	2:20 p.m.	2:50 p.m.	

shortest ← → longest		





# Timed Events Problems

I can solve problems about the duration of events.



1) How much time passes between the following times?

a) 3:10 p.m. to 4:15 p.m.

\_\_\_\_\_

b) 2:15 p.m. to 3:40 p.m.

\_\_\_\_\_

c) 10:40 a.m. to 12:50 p.m.

\_\_\_\_\_

d) 5:10 p.m. to 8:50 p.m.

\_\_\_\_\_

e) 7:20 p.m. to 11:10 p.m.

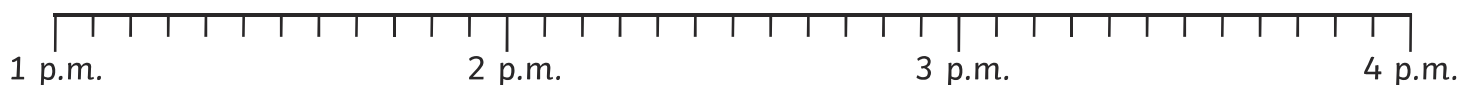
\_\_\_\_\_

f) 10:20 p.m. to 2:40 a.m. (the next day)

\_\_\_\_\_

2) Answer these questions. Use the timelines to help you.

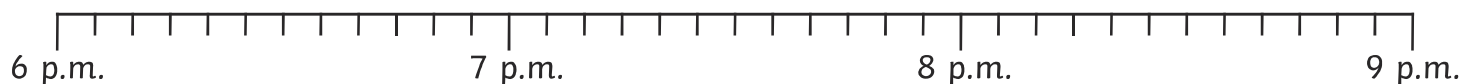
a) French starts at 1:20 p.m. and lasts 55 minutes. What time does it finish?



\_\_\_\_\_

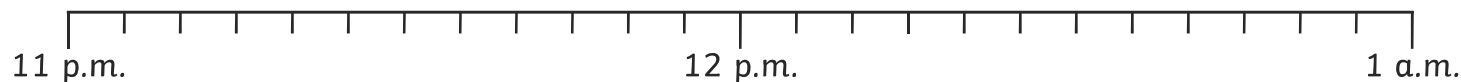


- b) My favourite TV show starts at 6:55 p.m. It lasts 1 hour and 10 minutes.  
What time does it finish?



\_\_\_\_\_

- c) I woke up at 12:35 a.m. I had been asleep for 1 hour and 20 minutes.  
What time did I go to sleep?



\_\_\_\_\_

- d) My dad drove me to my auntie's house. The journey was 1 hour and 15 minutes.  
We arrived at 9:20 p.m. What time did we set off?



\_\_\_\_\_

- 3) Answer these word problems by ticking all the circles that show the correct answer.

- a) I went to town on the bus. The journey took 25 minutes. I went around the shops for 45 minutes and then had a drink. If I got on the bus at 10:30 a.m., what time did I have a drink?

<input type="checkbox"/> 11:40 a.m.	<input type="checkbox"/> 11: 30	<input type="checkbox"/> 11: 30 a.m.	<input type="checkbox"/> twenty to twelve	<input type="checkbox"/> 20 to 12	<input type="checkbox"/> twenty past twelve
-------------------------------------	---------------------------------	--------------------------------------	---	-----------------------------------	---

- b) Carla's birthday party finished at 4:25 p.m. The party lasted 1 hour and 40 minutes.  
What time did it start?

<input type="checkbox"/> 1:45 p.m.	<input type="checkbox"/> $\frac{1}{4}$ to 2	<input type="checkbox"/> 2:45 p.m.	<input type="checkbox"/> quarter to 3	<input type="checkbox"/> $\frac{1}{4}$ to 3	<input type="checkbox"/> 2:40 p.m.
------------------------------------	---	------------------------------------	---------------------------------------	---	------------------------------------





4) Here is a table to show the start and end time of films. Calculate how long each film lasts (in minutes) and then order the films from shortest to longest.

	Start	End	Length of Show
The True Way Home	12:15 p.m.	2:55 p.m.	
Spy Sisters	1:05 p.m.	3:35 p.m.	
Don't Lose the Dog	4:35 p.m.	5:55 p.m.	

shortest ← → longest		

